

ELECTIVE COURSE - COMPUTER APPLICATIONS

Time all. = 3.00 Hrs.

Total Marks = 70%

Systematic arrangement of calculations and clear neat drawings are essential. Any data not given can be reasonably assumed according to the Egyptian Code of Practice.

Question (1):

For the shown frames in figure (1), draw in clear sketches the local axes for each element of these frames.

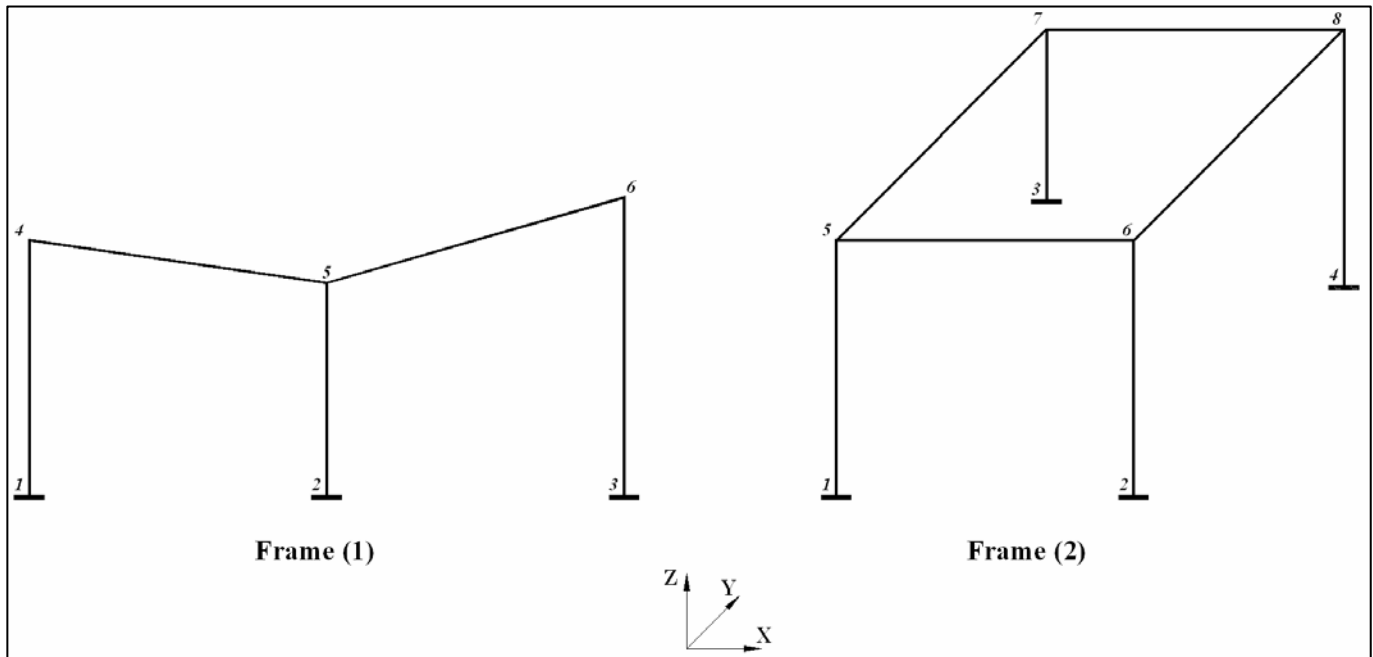


Figure (1)

Question (2):

- Draw a flow chart to demonstrate the sequence of operations to model a structure in a finite element program.
- Use clear sketch to show the use of end-offset and state its importance.
- How the frame element can be used to analyze the trusses in **SAP2000** program.
- Consider that the following types of problems are needed to model using **SAP2000** program:
 - Plane Frame**
 - 2D-Truss** (in one plane)
 - Raft on springs**

For each of the above cases explain (using sketches when appropriate) the following:

- Default plane (or planes) of work and available degrees of freedom.
- Types of elements involved.
- Data blocks or items that have to be defined to complete the analysis.

ELECTIVE COURSE - COMPUTER APPLICATIONS

Time all. = 3.00 Hrs.

Total Marks = 70%

Systematic arrangement of calculations and clear neat drawings are essential. Any data not given can be reasonably assumed according to the Egyptian Code of Practice.

Question (3):

It is required for the symmetrical overhanging beam (abcde) which supported on three link members (A, B & C) as shown in Figure (2):

- (1) Draw a flow chart to explain the steps to complete the modelling of the structure using SAP2000 program.
- (2) Calculate the forces in the three link members A, B and C.
- (3) Draw the Bending Moment, Shear Force and Normal Force diagrams for the symmetrical overhanging beam (abcde).

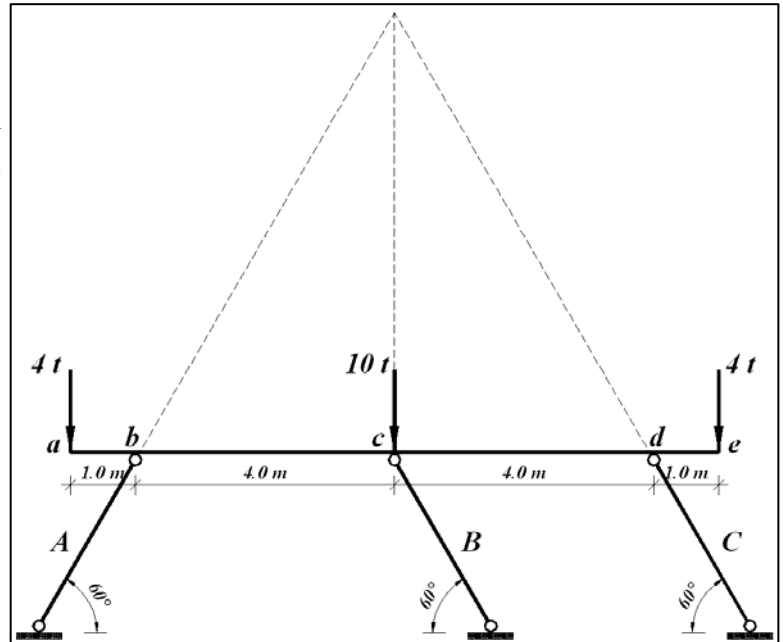


Figure (2)

Question (4):

It is required for the structure shown in Figure (3):

- (a) Draw a flow chart to explain the steps to complete the modelling of the structure using SAP2000 program.
- (b) Draw the Bending Moment, Shear Force and Normal Force diagrams.
- (c) Investigate whether the cross-section (I - I) is able to carry the external loads in bending and shear.

Note: The materials properties are, $f_{cu} = 30 \text{ N/mm}^2$, $f_y = 360 \text{ N/mm}^2$, f_y (stirrup) = 240 N/mm^2 .

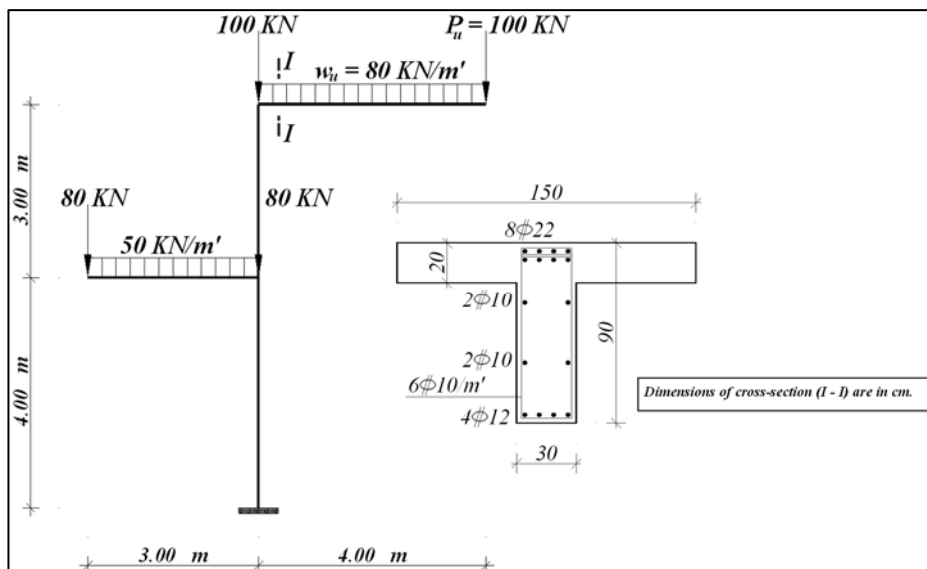


Figure (3)